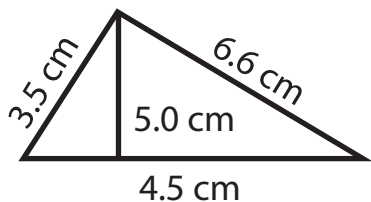


Name : _____

Score : _____ Date : _____

Identify the Type, Area and Perimeter for each Triangle

1

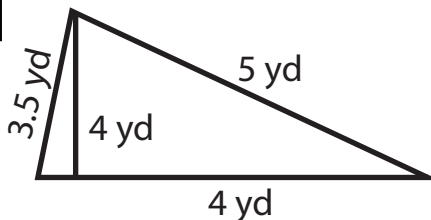


Type = _____

Area = _____

Perimeter = _____

2

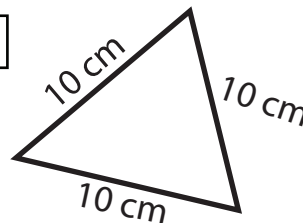


Type = _____

Area = _____

Perimeter = _____

3

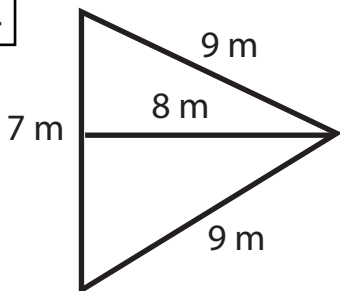


Type = _____

Area = _____

Perimeter = _____

4

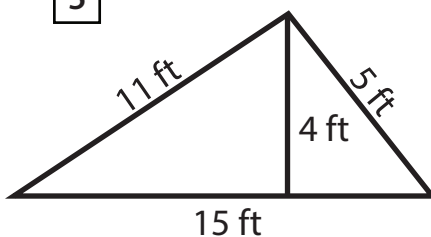


Type = _____

Area = _____

Perimeter = _____

5

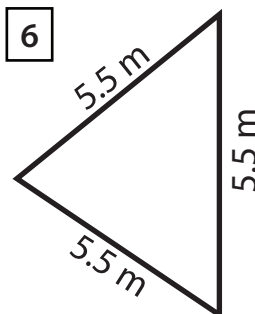


Type = _____

Area = _____

Perimeter = _____

6

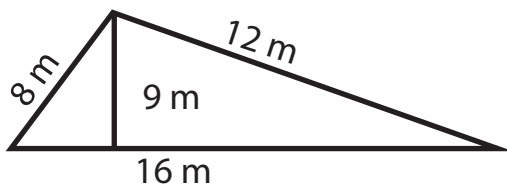


Type = _____

Area = _____

Perimeter = _____

7

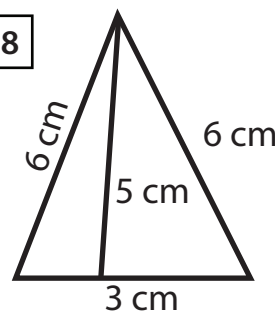


Type = _____

Area = _____

Perimeter = _____

8



Type = _____

Area = _____

Perimeter = _____